

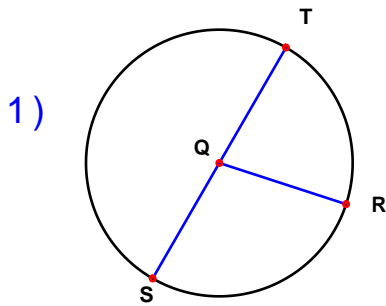
Name : _____

Score : _____

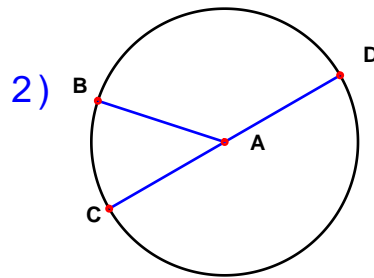
Teacher : _____

Date : _____

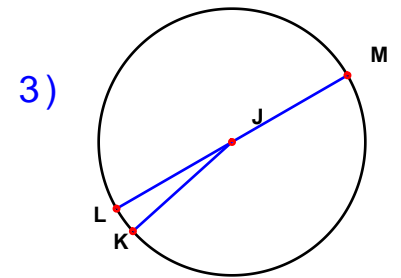
Solve the missing elements for each problem. Use 3.14 for π . Area = πr^2 ; C = πD



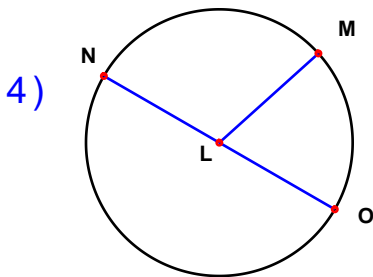
Radius: 13 inches
Diameter: _____
Circumference: _____
Area: _____



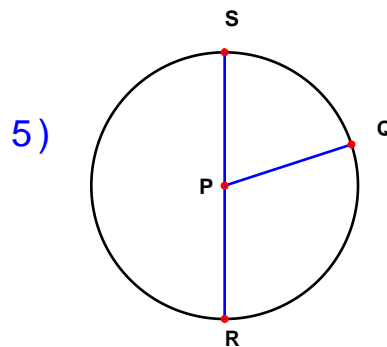
Radius: _____
Diameter: 12 cm
Circumference: _____
Area: _____



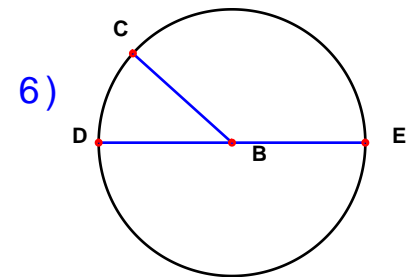
Radius: 19 inches
Diameter: _____
Circumference: _____
Area: _____



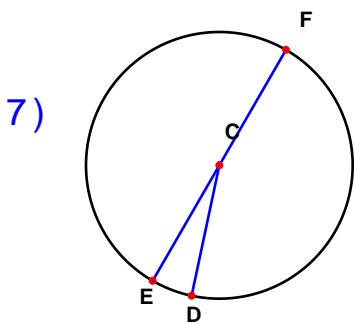
Radius: 14 cm
Diameter: _____
Circumference: _____
Area: _____



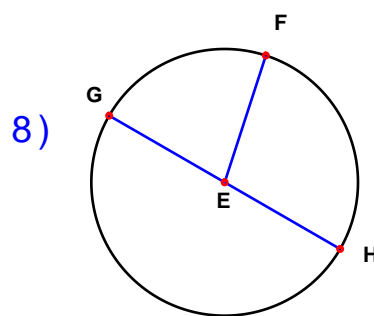
Radius: _____
Diameter: 22 inches
Circumference: _____
Area: _____



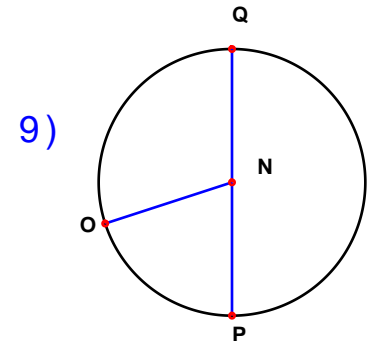
Radius: 10 cm
Diameter: _____
Circumference: _____
Area: _____



Radius: _____
Diameter: 16 inches
Circumference: _____
Area: _____



Radius: 5 cm
Diameter: _____
Circumference: _____
Area: _____



Radius: _____
Diameter: 32 inches
Circumference: _____
Area: _____



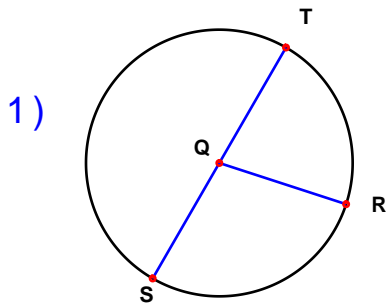
Name : _____

Score : _____

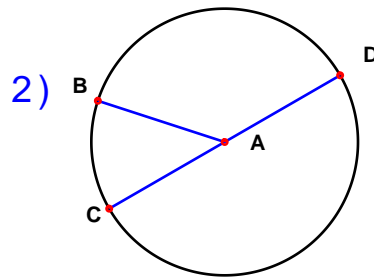
Teacher : _____

Date : _____

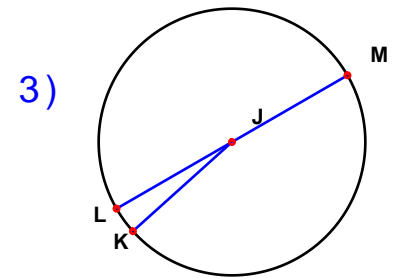
Solve the missing elements for each problem. Use 3.14 for π . Area = πr^2 ; C = πD



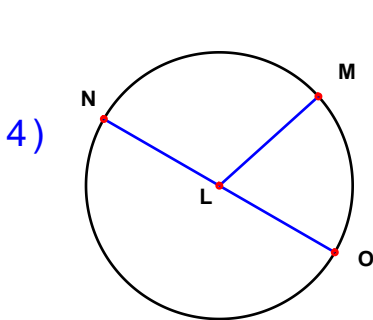
Radius: 13 inches
Diameter: 26 inches
Circumference: 81.64 inches
Area: 530.66 inches²



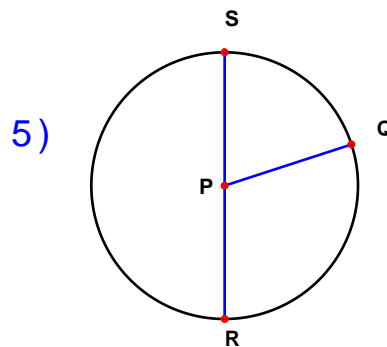
Radius: 6 cm
Diameter: 12 cm
Circumference: 37.68 cm
Area: 113.04 cm²



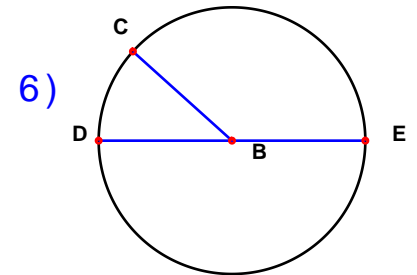
Radius: 19 inches
Diameter: 38 inches
Circumference: 119.32 inches
Area: 1133.54 inches²



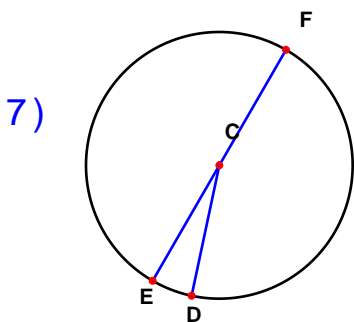
Radius: 14 cm
Diameter: 28 cm
Circumference: 87.92 cm
Area: 615.44 cm²



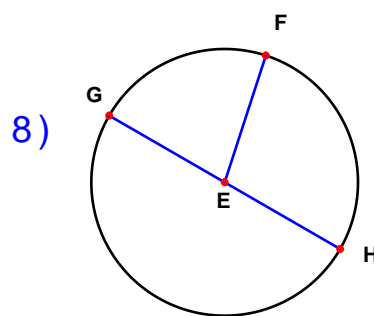
Radius: 11 inches
Diameter: 22 inches
Circumference: 69.08 inches
Area: 379.94 inches²



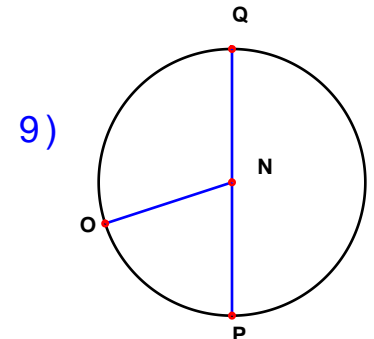
Radius: 10 cm
Diameter: 20 cm
Circumference: 62.8 cm
Area: 314 cm²



Radius: 8 inches
Diameter: 16 inches
Circumference: 50.24 inches
Area: 200.96 inches²



Radius: 5 cm
Diameter: 10 cm
Circumference: 31.4 cm
Area: 78.5 cm²



Radius: 16 inches
Diameter: 32 inches
Circumference: 100.48 inches
Area: 803.84 inches²

